


Grade 3 Roman Numerals Worksheet

READING ROMAN NUMERALS (1 - 50)

Find the sum.

1. XXXIII = _____
2. XIII = _____
3. XX = _____
4. XXXI = _____
5. VI = _____
6. VIII = _____
7. XLIX = _____
8. IV = _____
9. XXIV = _____
10. XVII = _____
11. IX = _____
12. XII = _____
13. XXVI = _____
14. XLVII = _____
15. XXXIV = _____




Grade 3 Roman Numerals Worksheet

READING ROMAN NUMERALS (1 - 50)

Find the sum.

1. XL = _____
2. XXX = _____
3. V = _____
4. XV = _____
5. XXI = _____
6. XXVII = _____
7. XXVIII = _____
8. XXXVII = _____
9. L = _____
10. XLVI = _____
11. III = _____
12. VII = _____
13. XXXIX = _____
14. XIX = _____
15. XLIII = _____

Grade 3 Roman Numerals Worksheet



READING ROMAN NUMERALS (1 - 50)

Find the sum.

1. XXXVIII = _____

2. XLI = _____

3. XLII = _____

4. VII = _____

5. XVI = _____

6. XLIV = _____

7. XXIX = _____

8. XXXVII = _____

9. VII = _____

10. XXXIX = _____


11. XIX = _____

12. XLIII = _____

13. VIII = _____

14. XXIII = _____

15. XII = _____



Grade 3 Addition Worksheet

READING ROMAN NUMERALS (1 - 50)

Find the sum.

1. VIII = _____
2. XXIII = _____
3. XII = _____
4. X = _____
5. XXXVI = _____
6. XIX = _____
7. IV = _____
8. XLV = _____
9. XI = _____
10. XXII = _____
11. XIII = _____
12. V = _____
13. XXXVIII = _____
14. XLI = _____
15. XLII = _____