

Grade 3 Subtraction Worksheet




SUBTRACTING 1-DIGIT FROM 2-DIGIT NUMBERS

Find the difference.

1. $15 - 7 =$ _____
2. $24 - 8 =$ _____
3. $36 - 9 =$ _____
4. $47 - 5 =$ _____
5. $52 - 4 =$ _____
6. $63 - 7 =$ _____
7. $89 - 6 =$ _____
8. $78 - 3 =$ _____
9. $44 - 2 =$ _____
10. $53 - 1 =$ _____
11. $67 - 8 =$ _____
12. $72 - 5 =$ _____
13. $83 - 6 =$ _____
14. $94 - 7 =$ _____
15. $45 - 9 =$ _____
16. $59 - 3 =$ _____
17. $61 - 2 =$ _____
18. $74 - 4 =$ _____
19. $88 - 5 =$ _____
20. $96 - 7 =$ _____
21. $31 - 8 =$ _____
22. $43 - 6 =$ _____
23. $56 - 9 =$ _____
24. $62 - 3 =$ _____
25. $75 - 4 =$ _____
26. $87 - 2 =$ _____
27. $90 - 5 =$ _____
28. $38 - 7 =$ _____
29. $49 - 8 =$ _____
30. $66 - 9 =$ _____


Grade 3 Subtraction Worksheet



SUBTRACTING 1-DIGIT FROM 2-DIGIT NUMBERS

Find the difference.

1. $23 - 5 =$ _____
2. $51 - 7 =$ _____
3. $82 - 6 =$ _____
4. $17 - 9 =$ _____
5. $99 - 1 =$ _____
6. $32 - 4 =$ _____
7. $41 - 8 =$ _____
8. $65 - 7 =$ _____
9. $73 - 2 =$ _____
10. $80 - 3 =$ _____
11. $28 - 6 =$ _____
12. $59 - 7 =$ _____
13. $69 - 4 =$ _____
14. $34 - 3 =$ _____
15. $92 - 5 =$ _____
16. $48 - 8 =$ _____
17. $53 - 6 =$ _____
18. $81 - 9 =$ _____
19. $77 - 1 =$ _____
20. $39 - 2 =$ _____
21. $24 - 9 =$ _____
22. $47 - 8 =$ _____
23. $55 - 3 =$ _____
24. $60 - 7 =$ _____
25. $19 - 4 =$ _____
26. $85 - 6 =$ _____
27. $68 - 7 =$ _____
28. $33 - 9 =$ _____
29. $49 - 2 =$ _____
30. $72 - 3 =$ _____




Grade 3 Subtraction Worksheet

SUBTRACTING 1-DIGIT FROM 2-DIGIT NUMBERS

Find the difference.

1. $26 - 9 =$ _____
2. $51 - 6 =$ _____
3. $64 - 8 =$ _____
4. $72 - 4 =$ _____
5. $39 - 7 =$ _____
6. $84 - 3 =$ _____
7. $97 - 5 =$ _____
8. $42 - 2 =$ _____
9. $58 - 6 =$ _____
10. $63 - 7 =$ _____
11. $29 - 1 =$ _____
12. $54 - 9 =$ _____
13. $71 - 8 =$ _____
14. $87 - 2 =$ _____
15. $43 - 6 =$ _____
16. $95 - 7 =$ _____
17. $38 - 5 =$ _____
18. $82 - 9 =$ _____
19. $46 - 4 =$ _____
20. $60 - 3 =$ _____
21. $33 - 2 =$ _____
22. $91 - 7 =$ _____
23. $75 - 8 =$ _____
24. $49 - 4 =$ _____
25. $83 - 5 =$ _____
26. $57 - 6 =$ _____
27. $65 - 9 =$ _____
28. $20 - 7 =$ _____
29. $78 - 3 =$ _____
30. $96 - 2 =$ _____



Grade 3 Subtraction Worksheet

SUBTRACTING 1-DIGIT FROM 2-DIGIT NUMBERS

Find the difference.

1. $41 - 9 =$ _____
2. $50 - 6 =$ _____
3. $37 - 8 =$ _____
4. $85 - 4 =$ _____
5. $66 - 1 =$ _____
6. $93 - 7 =$ _____
7. $28 - 2 =$ _____
8. $74 - 9 =$ _____
9. $55 - 5 =$ _____
10. $30 - 4 =$ _____
11. $98 - 6 =$ _____
12. $69 - 3 =$ _____
13. $77 - 8 =$ _____
14. $48 - 7 =$ _____
15. $86 - 5 =$ _____
16. $95 - 7 =$ _____
17. $38 - 5 =$ _____
18. $82 - 9 =$ _____
19. $46 - 4 =$ _____
20. $60 - 3 =$ _____
21. $33 - 2 =$ _____
22. $91 - 7 =$ _____
23. $75 - 8 =$ _____
24. $49 - 4 =$ _____
25. $83 - 5 =$ _____
26. $57 - 6 =$ _____
27. $65 - 9 =$ _____
28. $20 - 7 =$ _____
29. $78 - 3 =$ _____
30. $96 - 2 =$ _____