


Grade 3 Subtraction Worksheet

SUBTRACT WHOLE TENS FROM A 3-DIGIT NUMB

Find the difference.

- | | |
|------------------|------------------|
| 1. $692 - 20 =$ | 16. $423 - 30 =$ |
| 2. $509 - 60 =$ | 17. $685 - 20 =$ |
| 3. $496 - 90 =$ | 18. $328 - 70 =$ |
| 4. $194 - 10 =$ | 19. $916 - 80 =$ |
| 5. $582 - 30 =$ | 20. $472 - 60 =$ |
| 6. $317 - 40 =$ | 21. $834 - 20 =$ |
| 7. $714 - 50 =$ | 22. $519 - 40 =$ |
| 8. $285 - 60 =$ | 23. $787 - 90 =$ |
| 9. $903 - 20 =$ | 24. $256 - 50 =$ |
| 10. $608 - 70 =$ | 25. $689 - 70 =$ |
| 11. $845 - 90 =$ | 26. $743 - 30 =$ |
| 12. $751 - 10 =$ | 27. $510 - 80 =$ |
| 13. $678 - 40 =$ | 28. $891 - 90 =$ |
| 14. $549 - 50 =$ | 29. $473 - 20 =$ |
| 15. $792 - 60 =$ | 30. $654 - 60 =$ |



Grade 3 Subtraction Worksheet

SUBTRACT WHOLE TENS FROM A 3-DIGIT NUMB

Find the difference.

$1. 372 - 50 =$

$16. 803 - 70 =$

$2. 918 - 40 =$

$17. 346 - 90 =$

$3. 823 - 70 =$

$18. 719 - 40 =$

$4. 506 - 90 =$

$19. 584 - 30 =$

$5. 781 - 30 =$

$20. 952 - 60 =$

$6. 645 - 20 =$

$21. 491 - 70 =$

$7. 307 - 50 =$

$22. 326 - 80 =$

$8. 852 - 60 =$

$23. 673 - 20 =$

$9. 739 - 70 =$

$24. 825 - 50 =$

$10. 918 - 80 =$

$25. 792 - 90 =$

$11. 502 - 40 =$

$26. 458 - 60 =$

$12. 615 - 30 =$

$27. 697 - 40 =$

$13. 793 - 60 =$


$28. 619 - 70 =$

$14. 870 - 20 =$

$29. 374 - 80 =$

$15. 561 - 50 =$

$30. 853 - 90 =$




Grade 3 Subtraction Worksheet

SUBTRACT WHOLE TENS FROM A 3-DIGIT NUMB

Find the difference.

- | | |
|------------------|------------------|
| 1. $748 - 30 =$ | 16. $819 - 90 =$ |
| 2. $529 - 20 =$ | 17. $704 - 60 =$ |
| 3. $487 - 70 =$ | 18. $953 - 50 =$ |
| 4. $610 - 50 =$ | 19. $342 - 40 =$ |
| 5. $893 - 60 =$ | 20. $617 - 30 =$ |
| 6. $742 - 40 =$ | 21. $748 - 20 =$ |
| 7. $815 - 30 =$ | 22. $890 - 70 =$ |
| 8. $689 - 20 =$ | 23. $432 - 60 =$ |
| 9. $576 - 90 =$ | 24. $671 - 50 =$ |
| 10. $804 - 70 =$ | 25. $896 - 40 =$ |
| 11. $953 - 60 =$ | 26. $583 - 30 =$ |
| 12. $621 - 50 =$ | 27. $719 - 20 =$ |
| 13. $739 - 40 =$ | 28. $906 - 90 =$ |
| 14. $582 - 30 =$ | 29. $578 - 70 =$ |
| 15. $465 - 20 =$ | 30. $845 - 60 =$ |



Grade 3 Subtraction Worksheet

SUBTRACT WHOLE TENS FROM A 3-DIGIT NUMB

Find the difference.

- | | |
|------------------|------------------|
| 1. $748 - 30 =$ | 16. $819 - 90 =$ |
| 2. $529 - 20 =$ | 17. $704 - 60 =$ |
| 3. $487 - 70 =$ | 18. $953 - 50 =$ |
| 4. $610 - 50 =$ | 19. $342 - 40 =$ |
| 5. $893 - 60 =$ | 20. $617 - 30 =$ |
| 6. $742 - 40 =$ | 21. $748 - 20 =$ |
| 7. $815 - 30 =$ | 22. $890 - 70 =$ |
| 8. $689 - 20 =$ | 23. $432 - 60 =$ |
| 9. $576 - 90 =$ | 24. $671 - 50 =$ |
| 10. $804 - 70 =$ | 25. $896 - 40 =$ |
| 11. $953 - 60 =$ | 26. $583 - 30 =$ |
| 12. $621 - 50 =$ | 27. $719 - 20 =$ |
| 13. $739 - 40 =$ | 28. $906 - 90 =$ |
| 14. $582 - 30 =$ | 29. $578 - 70 =$ |
| 15. $465 - 20 =$ | 30. $845 - 60 =$ |