

GRADE 3 MULTIPLICATION WORKSHEET


MULTIPLICATION WITH ARRAYS

COLOR IN SQUARES TO SOLVE THE MULTIPLICATION QUESTION.




$4 \times 4 = \underline{\quad}$

1




$6 \times 2 = \underline{\quad}$

2




$5 \times 6 = \underline{\quad}$

3




$2 \times 3 = \underline{\quad}$

4





$3 \times 4 = \underline{\quad}$

5



$4 \times 5 = \underline{\quad}$

6



MULTIPLICATION WITH ARRAYS

COLOR IN SQUARES TO SOLVE THE MULTIPLICATION QUESTION.



$6 \times 7 = \underline{\quad}$

1

$5 \times 2 = \underline{\quad}$

2

$4 \times 8 = \underline{\quad}$

3

$7 \times 7 = \underline{\quad}$

4

$9 \times 3 = \underline{\quad}$

5

$3 \times 8 = \underline{\quad}$

6



MULTIPLICATION WITH ARRAYS

COLOR IN SQUARES TO SOLVE THE MULTIPLICATION QUESTION.



$5 \times 4 = \underline{\quad}$

1

$5 \times 8 = \underline{\quad}$

2

$4 \times 7 = \underline{\quad}$

3

$7 \times 7 = \underline{\quad}$

4

$9 \times 2 = \underline{\quad}$

5

$2 \times 8 = \underline{\quad}$

6

