



Time word problems

Jack had a bad morning yesterday.

1. Jack usually goes to bed at 10 o'clock at night. The day before yesterday, he stayed up 47 minutes later than usual. What time did Jack go to bed?
2. Jack typically finishes his breakfast at 7:45 AM. One day, he finished it 22 minutes earlier than usual. What time did Jack finish his breakfast that day?
3. Jack's usual walk to work takes 15 minutes. However, due to heavy traffic, it took him 12 minutes longer yesterday. How long did it take Jack to walk to work yesterday?






Time word problems

On Fridays, Dr. Moore usually comes into his clinic at 9:30 in the morning and leaves at noon.

1. Dr. Moore typically finishes his last appointment 20 minutes before the clinic closes at 6:00 PM. At what time does Dr. Moore usually finish his last appointment?
2. On Tuesday, Dr. Moore had to extend his lunch break by 18 minutes and returned to the clinic at 1:18 PM. What time does Dr. Moore usually return from his lunch break?
3. Dr. Moore's afternoon appointments are typically scheduled to start 30 minutes after he returns from lunch. However, the first patient of the afternoon arrived 10 minutes early. How many minutes did the patient wait before seeing Dr. Moore?







Time word problems

Mrs. Williams was making dinner.



1. Mrs. Williams decided to bake a cake that needs to be in the oven for 75 minutes. How much time (in hours and minutes) did she bake the cake?
2. Mrs. Williams began baking the cake at 2:30 PM. If she had already prepared the batter 45 minutes earlier, at what time did she start preparing the batter?
3. After 180 minutes of resting and cooling, the cake was ready to be served. What time was the cake ready?






Time word problems

Ben is going to his grandparents' farm with his siblings, Carl, and Judy.

1. Ben usually goes for a morning jog at 6:45 AM. Today, he went 35 minutes later than usual. What time did Ben start his jog today?
2. After his jog, Ben takes a shower that usually lasts 20 minutes. If he started his shower at 7:30 AM today, what time did he finish?
3. Ben left the house for work at 8:10 AM and arrived at his office 25 minutes later than usual. If his usual arrival time is 8:40 AM, what time did Ben arrive at work today?





Time word problems

Ben is going to his grandparents' farm with his siblings, Carl, and Judy.

1. Today, Ben woke up 90 minutes earlier than usual. He usually wakes up at 7:30 in the morning. What time did he wake up today?
2. Ben started to prepare their breakfast as soon as he woke up. They ate their breakfast ten minutes before 7:00 in the morning. How many minutes did he take to prepare their breakfast?
3. They left home at 7:48 in the morning and arrived at the farm at eight minutes past eight. How many minutes did it take them to get to the farm?

