




GRADE 3 DIVISION WORKSHEET

MEANING OF DIVISION

DIVIDE THE FOOD BETWEEN THE KIDS. CIRCLE THE CORRECT EQUATION.


1



$6 \times 2 =$ $18 \div 2 =$ $5 - 2 =$

How many Charry does each kid get?


2



$2 \div 5 =$ $10 \div 2 =$ $5 - 10 =$

How many Mangos does each kid get?

3



$18 \times 2 =$ $18 \div 3 =$ $5 \div 2 =$

How many Bananas does each kid get?

4



$6 \times 5 =$ $16 \div 4 =$ $5 \div 4 =$

How many oranges does each kid get?





GRADE 3 DIVISION WORKSHEET

MEANING OF DIVISION

DIVIDE THE FOOD BETWEEN THE KIDS. CIRCLE THE CORRECT EQUATION.

1





$$6 \times 4 = \quad 8 \div 4 = \quad 5 - 4 =$$

$$6 \div 2 = \quad 20 \div 4 = \quad 40 \div 8 =$$

How many kiwi does each kid get?

2




$$6 \times 4 = \quad 8 \div 4 = \quad 5 - 4 =$$

$$6 \div 2 = \quad 20 \div 4 = \quad 40 \div 8 =$$

How many lemons does each kid get?

3




$$6 \times 4 = \quad 80 \div 4 = \quad 5 - 40 =$$

$$60 \div 4 = \quad 20 \div 2 = \quad 20 \div 5 =$$

How many apple does each kid get?

4



$$60 \times 4 = \quad 18 \div 4 = \quad 60 - 4 =$$

$$12 \div 2 = \quad 16 \div 4 = \quad 20 \div 8 =$$

How many oranges does each kid get?





GRADE 3 DIVISION WORKSHEET

MEANING OF DIVISION

DIVIDE THE ANIMALS BETWEEN THE KIDS. CIRCLE THE CORRECT EQUATION.


1



$6 \div 4 =$	$8 \div 4 =$	$9 \div 4 =$
$12 \div 2 =$	$16 \div 4 =$	$20 \div 8 =$

How many Tiger does each kid get?


2



$8 \div 8 =$	$8 \div 4 =$	$6 \div 4 =$
$9 \div 2 =$	$7 \div 4 =$	$12 \div 8 =$

How many sheep does each kid get?


3



$60 \times 4 =$	$18 \div 6 =$	$60 - 4 =$
$12 \div 2 =$	$18 \div 9 =$	$19 \div 8 =$

How many Elephent does each kid can play with ?

4



$10 \times 4 =$	$10 \div 4 =$	$6 - 5 =$
$12 \div 12 =$	$10 \div 10 =$	$20 \div 8 =$

How many Horse does each kid can play with?

