




GRADE 3 DIVISION WORKSHEET

# DIVIDING INTO EQUAL GROUPS

DIVIDE THE FOOD BETWEEN THE KIDS & WRITE THE DIVISION EQUATION.

1




$$\underline{\quad} \div \underline{\quad} = \underline{\quad}$$

How many Charry does each kid get?

\_\_\_\_\_

2




$$\underline{\quad} \div \underline{\quad} = \underline{\quad}$$

How many Mangos does each kid get?

\_\_\_\_\_

3



$$\underline{\quad} \div \underline{\quad} = \underline{\quad}$$

How many Bananas does each kid get?

\_\_\_\_\_

4



$$\underline{\quad} \div \underline{\quad} = \underline{\quad}$$

How many Oranges does each kid get?

\_\_\_\_\_






GRADE 3 DIVISION WORKSHEET

# DIVIDING INTO EQUAL GROUPS

DIVIDE THE FOOD BETWEEN THE KIDS & WRITE THE DIVISION EQUATION.

1





$$\underline{\quad} \div \underline{\quad} = \underline{\quad}$$

How many kiwi does each kid get?

\_\_\_\_\_

2




$$\underline{\quad} \div \underline{\quad} = \underline{\quad}$$

How many lemons does each kid get?

\_\_\_\_\_

3




$$\underline{\quad} \div \underline{\quad} = \underline{\quad}$$

How many apple does each kid get?

\_\_\_\_\_

4



$$\underline{\quad} \div \underline{\quad} = \underline{\quad}$$

How many oranges does each kid get?

\_\_\_\_\_





GRADE 3 DIVISION WORKSHEET

# DIVIDING INTO EQUAL GROUPS

DIVIDE THE ANIMAL BETWEEN THE KIDS & WRITE THE DIVISION EQUATION.

1




$$\underline{\quad} \div \underline{\quad} = \underline{\quad}$$

How many Tiger does each kid get?

\_\_\_\_\_

2




$$\underline{\quad} \div \underline{\quad} = \underline{\quad}$$

How many sheep does each kid get?

\_\_\_\_\_

3




$$\underline{\quad} \div \underline{\quad} = \underline{\quad}$$

How many Elephent does each kid can play with ?

\_\_\_\_\_

4



$$\underline{\quad} \div \underline{\quad} = \underline{\quad}$$

How many Horse does each kid can play with?

\_\_\_\_\_

