

Grade 3 Addition Worksheet

# ADD A 2-DIGIT & TWO 1-DIGIT NUMBERS

Find the missing numbers

1.  $4 + 2 + 17 =$

2.  $4 + 7 + 13 =$

3.  $24 + 3 + 5 =$

4.  $42 + 6 + 4 =$

5.  $10 + 8 + 12 =$

6.  $15 + 5 + 10 =$

7.  $7 + 9 + 14 =$

8.  $18 + 3 + 9 =$

9.  $21 + 5 + 4 =$

10.  $30 + 2 + 8 =$

11.  $12 + 7 + 11 =$

12.  $8 + 5 + 13 =$

13.  $14 + 6 + 10 =$

14.  $16 + 4 + 8 =$

15.  $25 + 3 + 7 =$

16.  $19 + 2 + 9 =$

17.  $28 + 4 + 3 =$

18.  $34 + 1 + 5 =$

19.  $20 + 6 + 14 =$

20.  $13 + 8 + 9 =$

21.  $17 + 5 + 18 =$

22.  $22 + 7 + 11 =$

23.  $9 + 14 + 7 =$

24.  $26 + 2 + 12 =$

25.  $31 + 3 + 6 =$


26.  $38 + 4 + 2 =$

27.  $16 + 9 + 10 =$

28.  $7 + 11 + 8 =$

29.  $15 + 12 + 3 =$

30.  $19 + 7 + 4 =$




Grade 3 Addition Worksheet

# ADD A 2-DIGIT & TWO 1-DIGIT NUMBERS

Find the missing numbers

- |                     |                     |
|---------------------|---------------------|
| 1. $22 + 3 + 5 =$   | 16. $7 + 12 + 14 =$ |
| 2. $13 + 16 + 1 =$  | 17. $28 + 1 + 4 =$  |
| 3. $11 + 5 + 13 =$  | 18. $19 + 3 + 8 =$  |
| 4. $20 + 4 + 9 =$   | 19. $25 + 6 + 7 =$  |
| 5. $12 + 10 + 7 =$  | 20. $36 + 2 + 3 =$  |
| 6. $17 + 6 + 8 =$   | 21. $13 + 8 + 9 =$  |
| 7. $23 + 2 + 4 =$   | 22. $15 + 10 + 5 =$ |
| 8. $9 + 18 + 3 =$   | 23. $22 + 2 + 12 =$ |
| 9. $14 + 7 + 9 =$   | 24. $17 + 8 + 7 =$  |
| 10. $21 + 5 + 3 =$  | 25. $34 + 1 + 5 =$  |
| 11. $18 + 2 + 10 =$ | 26. $18 + 6 + 11 =$ |
| 12. $15 + 6 + 11 =$ | 27. $23 + 4 + 8 =$  |
| 13. $32 + 2 + 8 =$  | 28. $27 + 2 + 7 =$  |
| 14. $29 + 5 + 6 =$  | 29. $21 + 10 + 4 =$ |
| 15. $10 + 9 + 15 =$ | 30. $16 + 5 + 9 =$  |



*Grade 3 Addition Worksheet*

## **ADD A 2-DIGIT & TWO 1-DIGIT NUMBERS**

*Find the missing numbers*

1.  $5 + 8 + 12 =$

2.  $14 + 3 + 7 =$

3.  $21 + 6 + 11 =$

4.  $18 + 4 + 9 =$

5.  $12 + 10 + 5 =$

6.  $8 + 15 + 2 =$

7.  $22 + 1 + 14 =$

8.  $16 + 7 + 6 =$

9.  $19 + 4 + 12 =$

10.  $25 + 3 + 8 =$

11.  $9 + 11 + 13 =$

12.  $17 + 2 + 10 =$

13.  $20 + 5 + 6 =$

14.  $24 + 7 + 9 =$

15.  $13 + 8 + 4 =$

16.  $30 + 3 + 7 =$

17.  $11 + 15 + 4 =$

18.  $23 + 5 + 12 =$

19.  $14 + 9 + 8 =$

20.  $18 + 6 + 7 =$

21.  $29 + 2 + 8 =$

22.  $12 + 7 + 11 =$

23.  $16 + 10 + 5 =$

24.  $21 + 4 + 9 =$

25.  $19 + 3 + 15 =$


26.  $26 + 6 + 8 =$

27.  $11 + 14 + 7 =$

28.  $22 + 5 + 12 =$

29.  $17 + 8 + 6 =$

30.  $24 + 3 + 9 =$



*Grade 3 Addition Worksheet*

## **ADD A 2-DIGIT & TWO 1-DIGIT NUMBERS**

*Find the missing numbers*

- |                     |                     |
|---------------------|---------------------|
| 1. $13 + 11 + 4 =$  | 16. $13 + 9 + 7 =$  |
| 2. $18 + 5 + 12 =$  | 17. $30 + 2 + 8 =$  |
| 3. $20 + 7 + 8 =$   | 18. $21 + 5 + 14 =$ |
| 4. $27 + 2 + 6 =$   | 19. $17 + 12 + 6 =$ |
| 5. $15 + 9 + 10 =$  | 20. $28 + 1 + 9 =$  |
| 6. $22 + 4 + 8 =$   | 21. $11 + 13 + 4 =$ |
| 7. $12 + 6 + 14 =$  | 22. $19 + 8 + 7 =$  |
| 8. $19 + 7 + 9 =$   | 23. $22 + 6 + 12 =$ |
| 9. $31 + 3 + 5 =$   | 24. $16 + 9 + 5 =$  |
| 10. $16 + 11 + 8 =$ | 25. $27 + 2 + 11 =$ |
| 11. $23 + 2 + 10 =$ | 26. $20 + 4 + 15 =$ |
| 12. $14 + 6 + 11 =$ | 27. $14 + 10 + 6 =$ |
| 13. $18 + 8 + 4 =$  | 28. $31 + 3 + 4 =$  |
| 14. $25 + 7 + 5 =$  | 29. $18 + 5 + 11 =$ |
| 15. $20 + 3 + 12 =$ | 30. $23 + 7 + 8 =$  |