

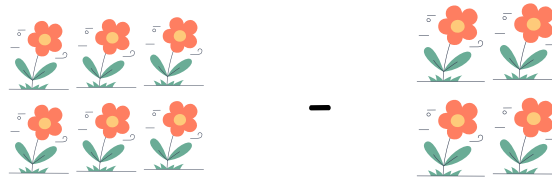
Grade 1 Addition Worksheet

Subtract Objects

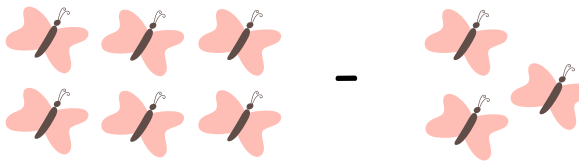
Some Objects are taken away. Write the subtraction sentence in the box. Answer it!



8 red circles in two rows of four. Minus 2 red circles in a vertical column. Equals a box containing the number 8.



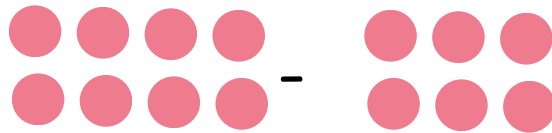
6 flowers in two rows of three. Minus 4 flowers in two rows of two. Equals an empty box.



6 butterflies in two rows of three. Minus 3 butterflies in two rows of two. Equals an empty box.



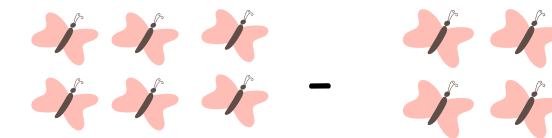
5 ladybugs in two rows of three. Minus 2 ladybugs in a horizontal row. Equals an empty box.



8 red circles in two rows of four. Minus 6 red circles in two rows of three. Equals an empty box.



6 ladybugs in two rows of three. Minus 3 ladybugs in two rows of two. Equals an empty box.




6 butterflies in two rows of three. Minus 4 butterflies in two rows of two. Equals an empty box.


Grade 1 Addition Worksheet

Subtract monsters

Some monsters are taken away. Write the subtraction sentence in the box. Answer it!



-




=



-



=




-




=




-




=




-



=



-



=