

Write addition sentences using number lines

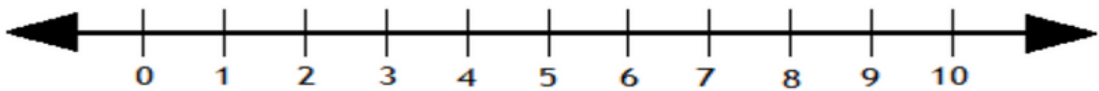
Solve the following by drawing hops on the number line.

1



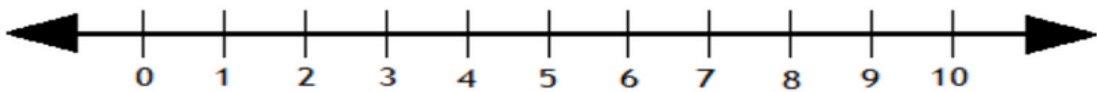
$$2 + 2 + 2 = \boxed{6}$$

2



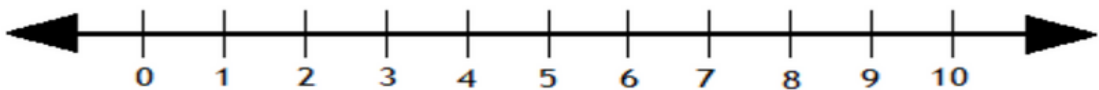
$$3 + 1 + 3 = \boxed{}$$

3



$$3 + 1 + 2 = \boxed{}$$

4

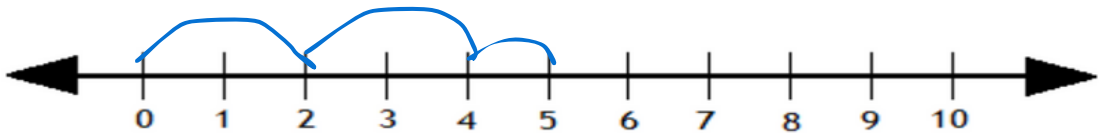


$$3 + 5 + 1 = \boxed{}$$

Adding with number lines

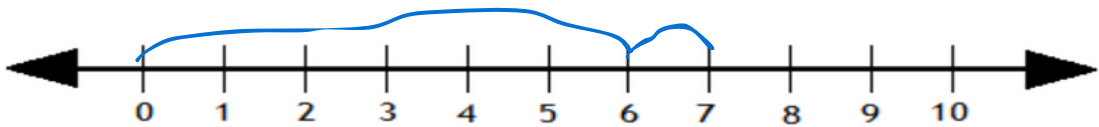
Solve the following by drawing hops on the number line.

1



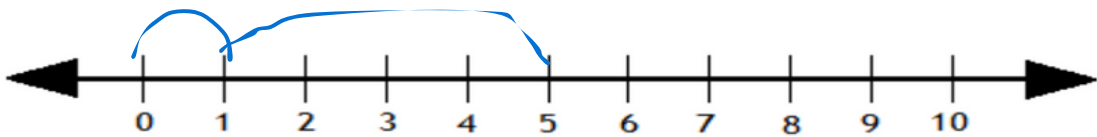
$$\boxed{2} + \boxed{3} = \boxed{5}$$

2



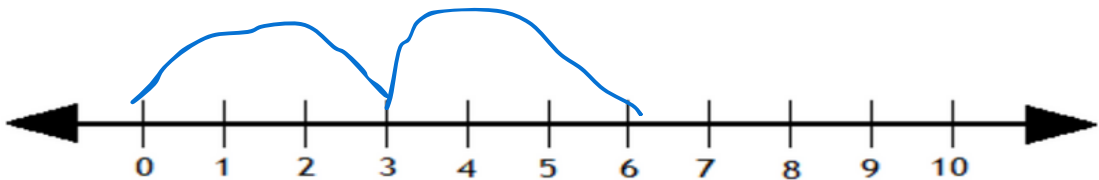
$$\boxed{} + \boxed{} = \boxed{}$$

3



$$\boxed{} + \boxed{} = \boxed{}$$

4



$$\boxed{} + \boxed{} = \boxed{}$$