



## Grade 1 Time Worksheet

### ELAPSED TIME - ONE HOUR

Draw the clock hands to show the time it will be after one hour.



What time will it be in 1 hour?




What time will it be in 1 hour?




What time will it be in 1 hour?



What time will it be in 1 hour?



What time will it be in 1 hour?





## Grade 1 Time Worksheet

### ELAPSED TIME - ONE HOUR


Draw the clock hands to show the time it will be after one hour.





What time will it be in 1 hour?




What time will it be in 1 hour?



What time will it be in 1 hour?



What time will it be in 1 hour?



What time will it be in 1 hour?

