
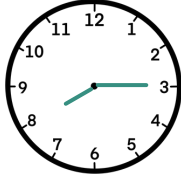
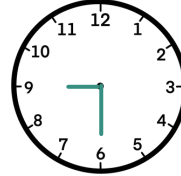

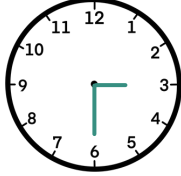
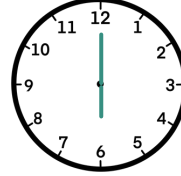
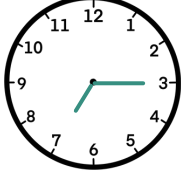
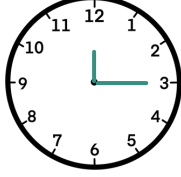




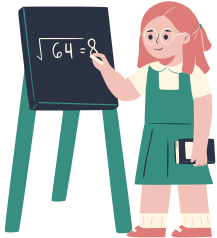


## Grade 1 Time Worksheet

# TELLING TIME - HALF HOURS

Write the time below each clock.


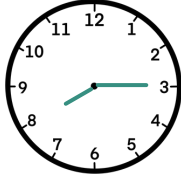
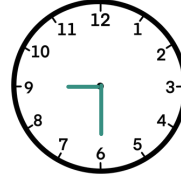

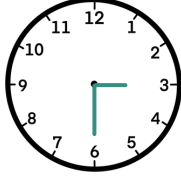
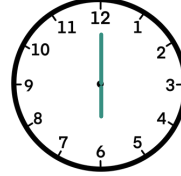
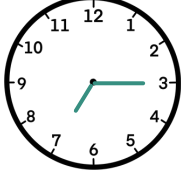
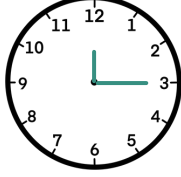




|   |   |   |
|---|---|---|
| <br><input type="text"/>  | <br><input type="text"/>  | <br><input type="text"/>  |
| <br><input type="text"/> | <br><input type="text"/> | <br><input type="text"/> |
| <br><input type="text"/> | <br><input type="text"/> | <br><input type="text"/> |
| <br><input type="text"/> | <br><input type="text"/> | <br><input type="text"/> |




## Grade 1 Time Worksheet

# TELLING TIME - HALF HOURS

Write the time below each clock.

|   |   |   |
|---|---|---|
| <br><input type="text"/>  | <br><input type="text"/>  | <br><input type="text"/>  |
| <br><input type="text"/> | <br><input type="text"/> | <br><input type="text"/> |
| <br><input type="text"/> | <br><input type="text"/> | <br><input type="text"/> |
| <br><input type="text"/> | <br><input type="text"/> | <br><input type="text"/> |



## Grade 1 Time Worksheet

# TELLING TIME - HALF HOURS

Write the time below each clock.

