


Grade 1 Addition Worksheet


Subtraction using pictures (up to 20)

It's harvest time at Jams 's Farm! Fill in the blanks according to the pictures. Then, complete the number sentences.




Farmer Jams harvested _____ tomatoes. He gave away _____ tomatoes to his neighbor.

$$\text{-----} - \text{-----} = \text{-----}$$



Farmer Jams harvested _____ apples. He gave away _____ apples to his neighbor.

$$\text{-----} - \text{-----} = \text{-----}$$



Farmer Jams harvested _____ oranges. He gave away _____ oranges to his neighbour.

$$\text{-----} - \text{-----} = \text{-----}$$