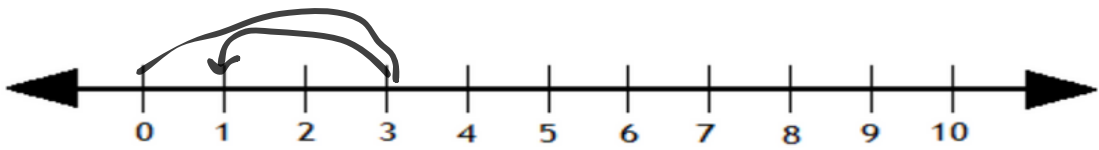


Subtraction sentences and number lines

Write the subtraction sentence using the number line.

1



$$\boxed{3} - \boxed{2} = \boxed{1}$$

2



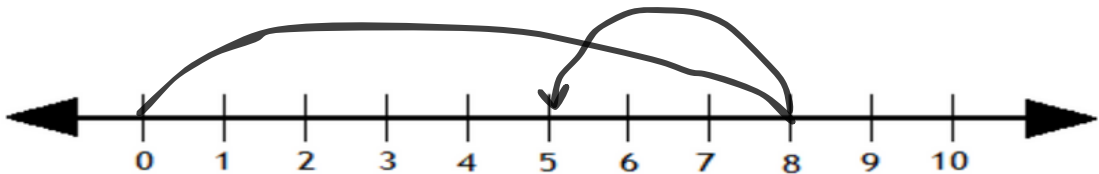
$$\boxed{} - \boxed{} = \boxed{}$$

3



$$\boxed{} - \boxed{} = \boxed{}$$

4

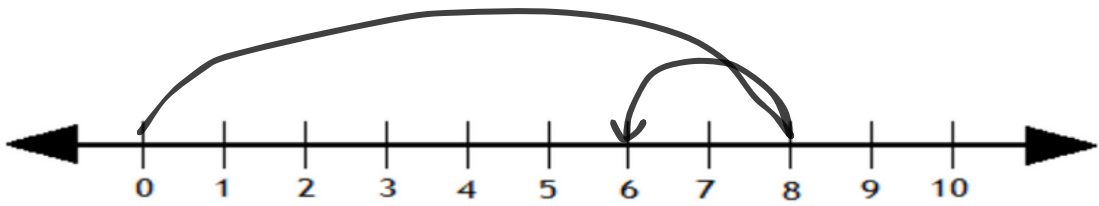


$$\boxed{} - \boxed{} = \boxed{}$$

Subtraction sentences and number lines

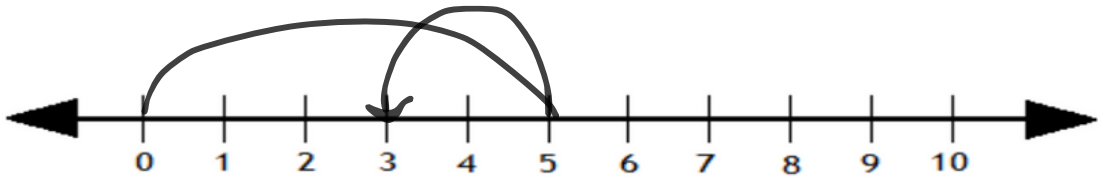
Write the subtraction sentence using the number line.

1



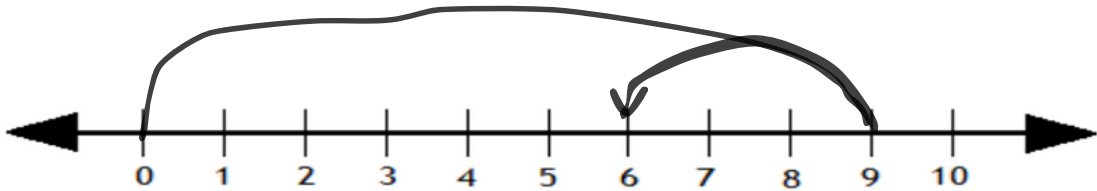
$$\boxed{8} - \boxed{2} = \boxed{6}$$

2



$$\boxed{} - \boxed{} = \boxed{}$$

3



$$\boxed{} - \boxed{} = \boxed{}$$

4



$$\boxed{} - \boxed{} = \boxed{}$$