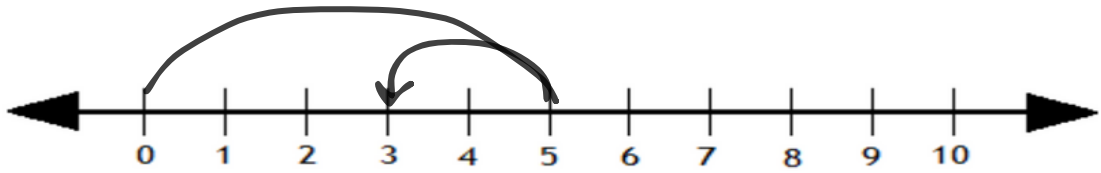


Number line subtraction

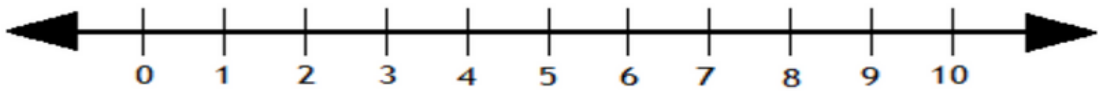
Subtract by drawing hops on the number line

1



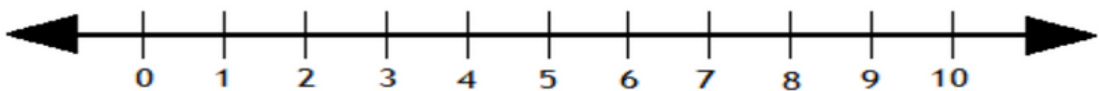
$$5 - 2 = \boxed{3}$$

2



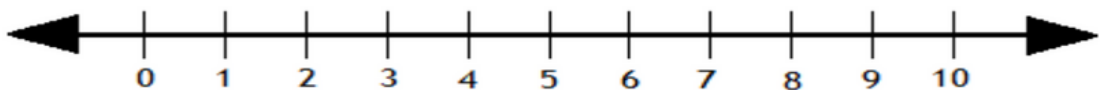
$$6 - 5 = \boxed{}$$

3



$$8 - 2 = \boxed{}$$

4

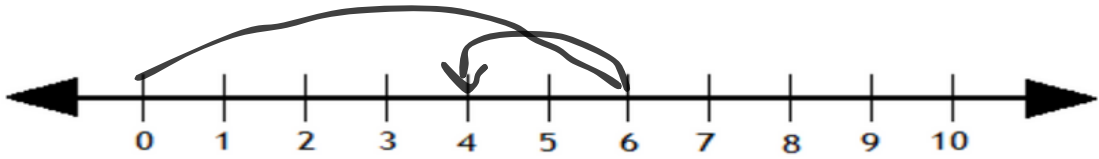


$$6 - 6 = \boxed{}$$

Subtracting using number lines

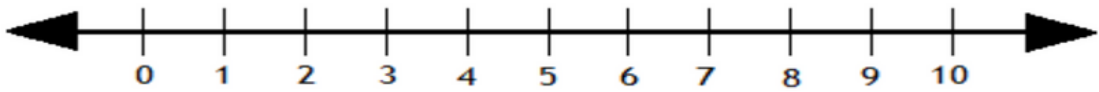
Subtract by drawing hops on the number line.

1



$$6 - 2 = \boxed{4}$$

2



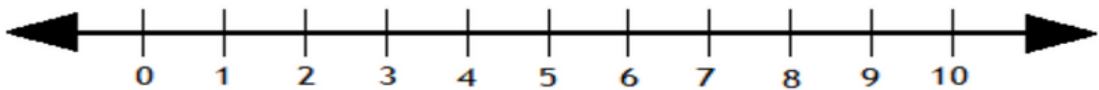
$$1 - 5 = \boxed{}$$

3



$$8 - 6 = \boxed{}$$

4



$$3 - 6 = \boxed{}$$