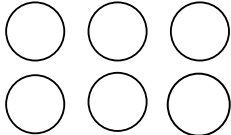
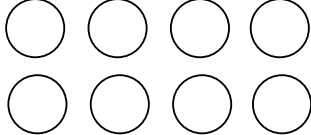


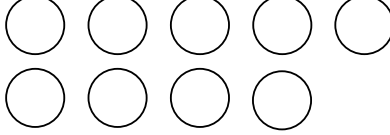
Subtraction using pictures

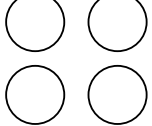
Count the circles. Write the total. Then, cross out circles according to the equation, and write the difference


9	-	5	=	4		TOTAL 9
---	---	---	---	---	--	------------

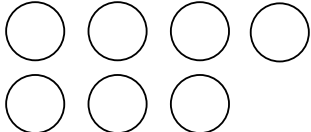
6	-	4	=			TOTAL <div style="border: 1px solid gray; width: 30px; height: 30px; margin: 0 auto;"></div>
---	---	---	---	--	--	---

8	-	3	=			TOTAL <div style="border: 1px solid gray; width: 30px; height: 30px; margin: 0 auto;"></div>
---	---	---	---	--	--	---

9	-	6	=			TOTAL <div style="border: 1px solid gray; width: 30px; height: 30px; margin: 0 auto;"></div>
---	---	---	---	--	--	---

4	-	1	=			TOTAL <div style="border: 1px solid gray; width: 30px; height: 30px; margin: 0 auto;"></div>
---	---	---	---	--	--	---


3	-	1	=			TOTAL <div style="border: 1px solid gray; width: 30px; height: 30px; margin: 0 auto;"></div>
---	---	---	---	--	--	---


5	-	1	=			TOTAL <div style="border: 1px solid gray; width: 30px; height: 30px; margin: 0 auto;"></div>
---	---	---	---	--	--	---


Grade 1 Addition | Worksheet

Subtraction using pictures

Count the Bugs. Write the total. Then, cross out Bugs according to the equation, and write the difference

<input type="text" value="6"/>	-	<input type="text" value="5"/>	=	<input type="text" value="1"/>		TOTAL
						<input type="text" value="6"/>

<input type="text" value="9"/>	-	<input type="text" value="4"/>	=	<input type="text"/>		TOTAL
						<input type="text"/>

<input type="text" value="6"/>	-	<input type="text" value="3"/>	=	<input type="text"/>		TOTAL
						<input type="text"/>

<input type="text" value="8"/>	-	<input type="text" value="6"/>	=	<input type="text"/>		TOTAL
						<input type="text"/>

<input type="text" value="5"/>	-	<input type="text" value="3"/>	=	<input type="text"/>		TOTAL
						<input type="text"/>

<input type="text" value="7"/>	-	<input type="text" value="4"/>	=	<input type="text"/>		TOTAL
						<input type="text"/>

<input type="text" value="5"/>	-	<input type="text" value="5"/>	=	<input type="text"/>		TOTAL
						<input type="text"/>