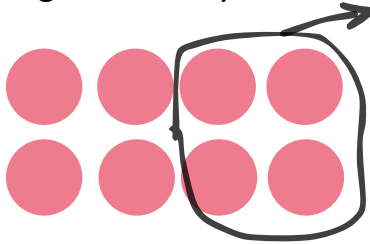


Subtraction sentences

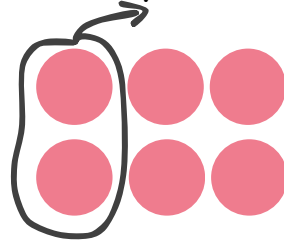
Some balls are being taken away. Circle the equation that describes how many balls will be left. Write the answer.

1



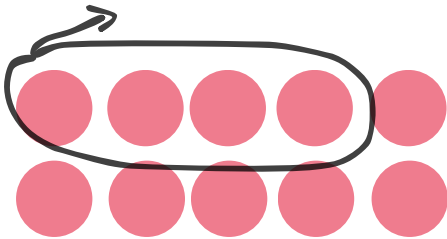
$9 - 3 = \square$	$0 - 0 = \square$
$9 - 4 = \square$	$8 - 4 = \square$

2




$4 - 2 = \square$	$6 - 2 = \square$
$6 - 4 = \square$	$9 - 2 = \square$

3




$3 - 1 = \square$	$9 - 3 = \square$
$10 - 4 = \square$	$1 - 1 = \square$

4



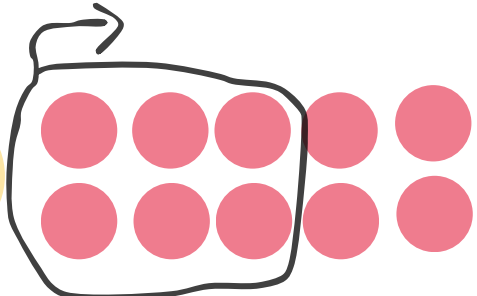
$4 - 3 = \square$	$6 - 3 = \square$
$4 - 1 = \square$	$7 - 1 = \square$

5



$4 - 3 = \square$	$3 - 2 = \square$
$8 - 2 = \square$	$3 - 1 = \square$

6



$10 - 9 = \square$	$3 - 9 = \square$
$10 - 6 = \square$	$2 - 7 = \square$