



ROWS, COLUMNS & ARRAYS

Fill in the blanks.



2 rows of 3

$$2 \times 3 = 6$$




___ rows of ___

$$___ \times ___ = ___$$



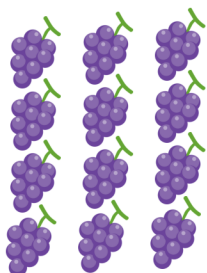
___ rows of ___

$$___ \times ___ = ___$$




___ rows of ___

$$___ \times ___ = ___$$




___ rows of ___

$$___ \times ___ = ___$$



___ rows of ___

$$___ \times ___ = ___$$



Grade 2 Addition Worksheet


ROWS, COLUMNS & ARRAYS

Fill in the blanks.




1 rows of 3

$$2 \times 3 = 6$$




___ rows of ___

$$___ \times ___ = ___$$




___ rows of ___

$$___ \times ___ = ___$$




___ rows of ___

$$___ \times ___ = ___$$



___ rows of ___

$$___ \times ___ = ___$$



___ rows of ___

$$___ \times ___ = ___$$

