



# CUPCAKES GIVEAWAY PICTOGRAPH

sofia baked cupcakes for her friends.

Read the chart and answer the questions

Number of cupcakes received by her friends



 = 1 cupcak

How many cupcakes did Margie receive?

Who received 5 cupcakes?

Who received the most cupcakes?

Who received the fewest cupcakes?


# NUMBER OF APPLES PICTOGRAPH



Count the apples that Sarah collected over four days. Write the number of apples inside the box.



Numbers of apples



Day1

Day 2

Day3

Day4



How many apples did Sarah collect each day?

