


MULTIPLICATION WITH ARRAYS

Complete the equations




$$2 \times \square = 10$$




$$3 \times \square = 12$$



$$\square \times 4 = 20$$



$$4 \times \square = 16$$




$$2 \times \square = 8$$




$$\square \times 3 = 20$$

MULTIPLICATION WITH ARRAYS


Complete the equations




$$3 \times \square = 9$$




$$3 \times \square = 12$$



$$\square \times 6 = 18$$



$$4 \times \square = 12$$



$$2 \times \square = 24$$



$$\square \times 3 = 8$$

