

# MULTIPLICATION SENTENCES

Circle the equation that describes the group of objects.



$9 \times 4 =$


$2 \times 3 =$

$7 \times 5 =$

$8 \times 5 =$

How many banana are there ?

---



$4 \times 4 =$

$6 \times 3 =$

$5 \times 1 =$

$3 \times 2 =$

How many Dinosaurs are there ?

---



$3 \times 4 =$

$8 \times 3 =$

$3 \times 3 =$

$8 \times 7 =$

How many baby dinosaurs are there ?

---



$3 \times 4 =$

$4 \times 4 =$

$3 \times 3 =$


$8 \times 3 =$

How many Monkeys are there ?

---

# MULTIPLICATION SENTENCES

Circle the equation that describes the group of objects.



$6 \times 4 =$


$2 \times 4 =$

$7 \times 2 =$

$6 \times 2 =$

How many banana are there ?

---



$2 \times 2 =$

$4 \times 3 =$

$3 \times 3 =$

$2 \times 7 =$

How many Dinosaurs are there ?

---



$3 \times 5 =$

$8 \times 3 =$

$3 \times 9 =$

$3 \times 7 =$

How many baby dinosaurs are there ?

---



$3 \times 7 =$

$5 \times 3 =$

$6 \times 3 =$

$8 \times 4 =$

How many Monkeys are there ?

---