



Grade 2 Addition Worksheet

# MEANING OF MULTIPLICATION




Circle the group that matches the equation

$$7 \times 3 = 21$$



How many Circles are there in that group ? \_\_\_

$$9 \times 3 = 27$$




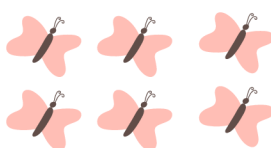
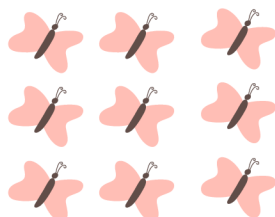
How many Circles are there in that group ? \_\_\_

$$8 \times 2 = 16$$



How many Circles are there in that group ? \_\_\_

$$3 \times 3 = 9$$






How many Circles are there in that group ? \_\_\_

# MEANING OF MULTIPLICATION

Circle the group that matches the equation

---

$$6 \times 4 = 24$$



How many tomatoes are there in that group? \_\_\_

---


$$9 \times 3 = 27$$



How many Circles are there in that group? \_\_\_

---




$$5 \times 2 = 10$$



How many Apples are there in that group? \_\_\_

---

$$4 \times 3 = 12$$



How many Oranges are there in that group? \_\_\_

