


# FRACTIONS OF A GROUP OR SET

What fraction of the stars are white?



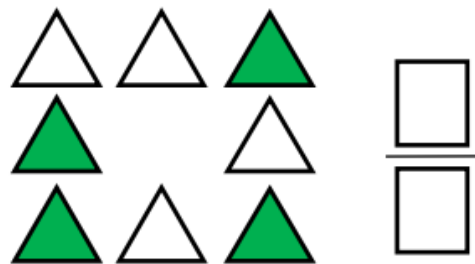
What fraction of the triangles are green?



What fraction of the stars are white?




What fraction of the triangles are green?

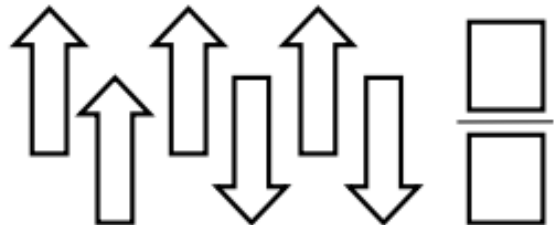


# FRACTIONS OF A GROUP OR SET

What fraction of the diamonds are green?



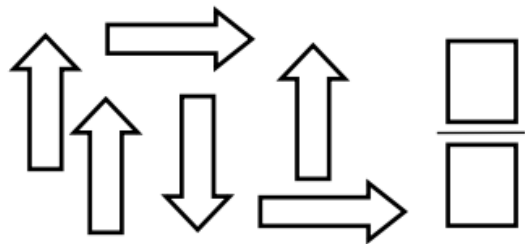
What fraction of the arrows point up?



What fraction of the diamonds are green?



What fraction of the arrows point up?



What fraction of the circles are green?

