




Identify halves

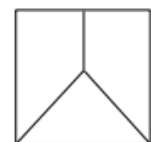
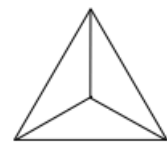
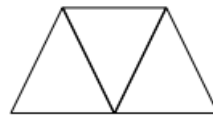
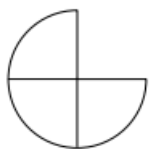
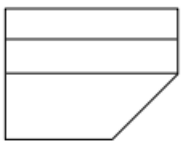
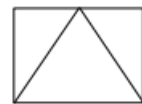
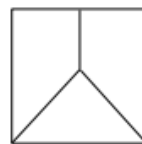

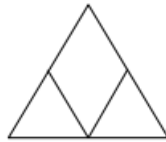
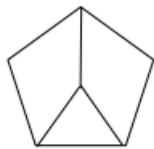
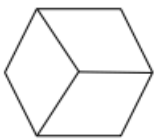
Color half of each shape which shows two equal parts.





Identify thirds

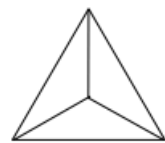
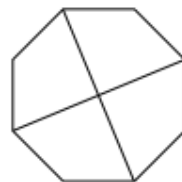
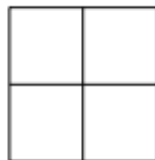
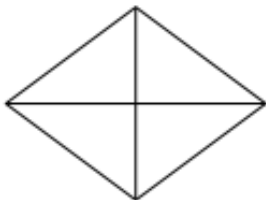

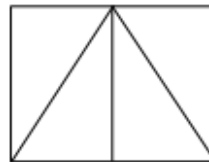
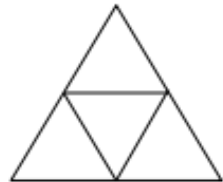
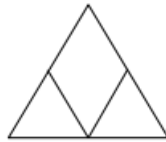
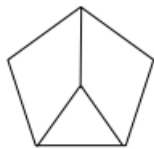
Circle the shapes that are divided into thirds (3 equal parts)





Identify quarters

Circle the shapes that are divided into quarters (four equal parts).





Identify halves, thirds and quarters

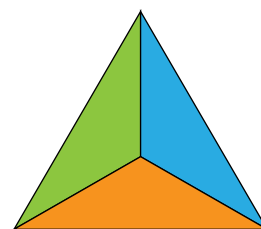
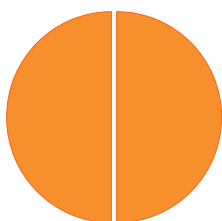
Circle the correct answer for each shape.

<p>Halves / Thirds / Quarters</p>	<p>Halves / Thirds / Quarters</p>	<p>Halves / Thirds / Quarters</p>
<p>Halves / Thirds / Quarters</p>	<p>Halves / Thirds / Quarters</p>	<p>Halves / Thirds / Quarters</p>
<p>Halves / Thirds / Quarters</p>	<p>Halves / Thirds / Quarters</p>	<p>Halves / Thirds / Quarters</p>
<p>Halves / Thirds / Quarters</p>	<p>Halves / Thirds / Quarters</p>	<p>Halves / Thirds / Quarters</p>




Identify halves, thirds and quarters


How is each shape divided? Draw lines to the correct description.




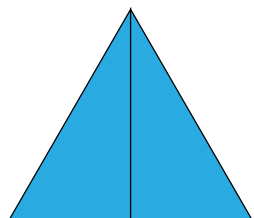
Halves



Thirds



Quarters





Identify halves, thirds, quarters, sixths and eighths

Write "Halves", "Thirds", "Quarters", "Sixths" or "Eighths" under each shape.

