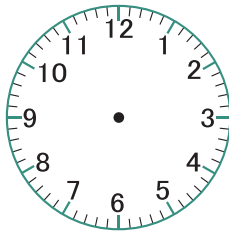


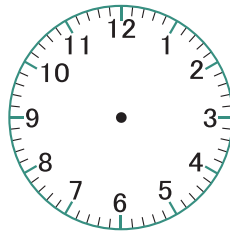
## Grade 1 Time Worksheet

# TELLING TIME - HALF HOURS (DRAW THE CLOCK)

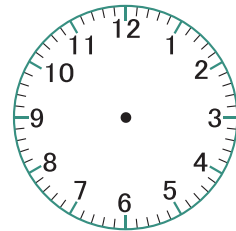
Write the time below each clock.



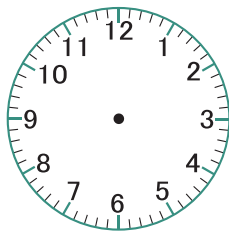
**8:00**



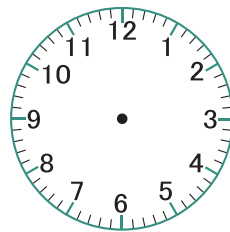
**8:30**



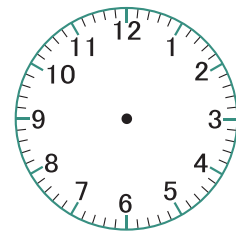
**4:00**



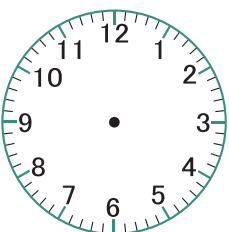
**7:30**



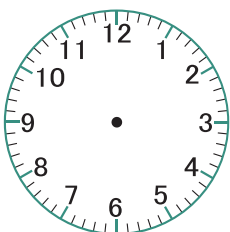
**5:55**



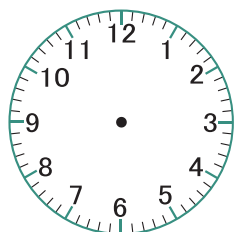
**5:20**



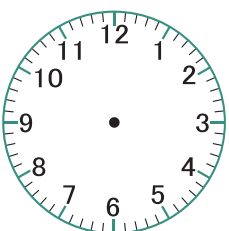
**8:30**



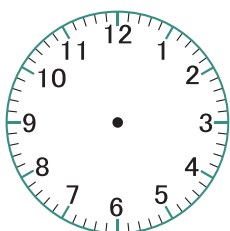
**10:00**



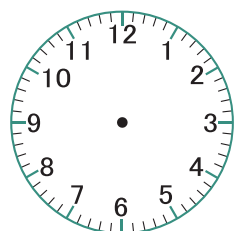
**9:30**



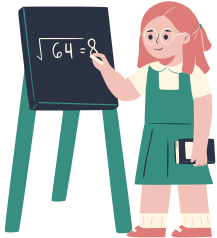
**2:00**



**1:00**



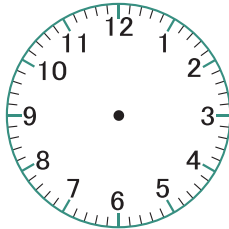
**1:30**



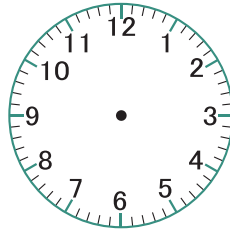
## Grade 1 Time Worksheet

# TELLING TIME - HALF HOURS (DRAW THE CLOCK)

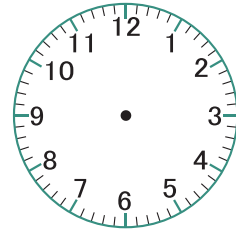
Write the time below each clock.



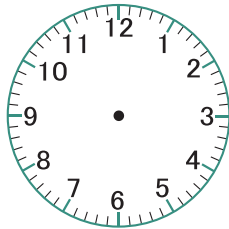
**4:00**



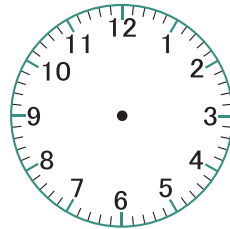
**5:00**



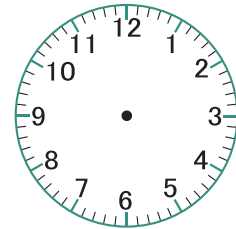
**2:00**



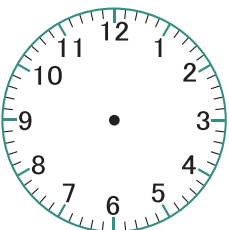
**12:30**



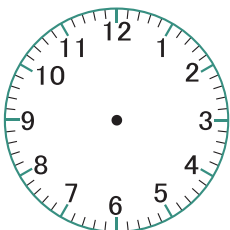
**1:30**



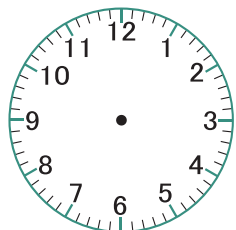
**8:30**



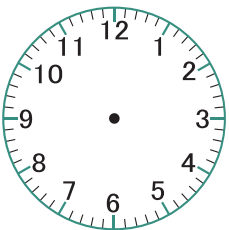
**3:00**



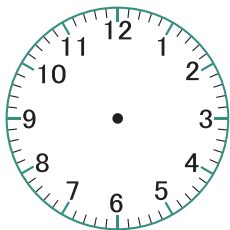
**2:00**



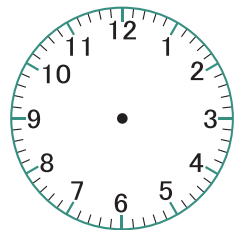
**9:30**



**5:00**



**10:30**



**8:00**