




Grade 2 Time Worksheet


Telling time - 5 minute intervals (draw the clock)


Write the time below each clock.


	5:50
---	-------------


	1:15
--	-------------


	4:10
--	-------------

	7:45
---	-------------


	4:05
---	-------------

	4:25
--	-------------

	11:35
---	--------------

	9:25
--	-------------


	12:00
---	--------------


	10:15
--	--------------


Grade 2 Time Worksheet


Telling time - 5 minute intervals (draw the clock)


Write the time below each clock.

	7:30
---	-------------

	3:25
--	-------------


	4:40
--	-------------

	8:50
---	-------------


	2:40
---	-------------

	6:45
--	-------------

	12:20
---	--------------

	2:25
--	-------------


	12:55
---	--------------


	10:30
--	--------------


Grade 2 Time Worksheet


Telling time - 5 minute intervals (draw the clock)

Write the time below each clock.

	7:25
---	-------------


	1:20
--	-------------


	10:15
--	--------------


	6:40
---	-------------


	9:25
---	-------------

	1:40
--	-------------

	7:30
---	-------------

	9:45
--	-------------


	7:50
---	-------------


	4:55
--	-------------


Grade 2 Time Worksheet


Telling time - 5 minute intervals (draw the clock)


Write the time below each clock.

	12:35
---	--------------


	1:30
--	-------------


	4:30
--	-------------


	1:00
---	-------------


	8:45
---	-------------

	12:10
--	--------------

	7:30
---	-------------

	10:20
--	--------------


	7:30
---	-------------


	12:25
--	--------------


Grade 2 Time Worksheet

Telling time - 5 minute intervals (draw the clock)

Write the time below each clock.


	7:20
---	-------------


	10:20
--	--------------


	2:55
--	-------------


	11:15
---	--------------


	12:20
---	--------------

	2:10
--	-------------

	2:05
---	-------------

	5:35
--	-------------


	2:50
---	-------------


	3:15
--	-------------


Grade 2 Time Worksheet


Telling time - 5 minute intervals (draw the clock)


Write the time below each clock.


	5:30
---	-------------


	4:00
--	-------------


	5:35
--	-------------

	9:05
---	-------------

	5:35
---	-------------

	3:15
--	-------------

	7:30
---	-------------

	10:25
--	--------------

	12:55
---	--------------

	1:20
--	-------------