



Grade 2 Time Worksheet


# Telling time - 1 minute intervals (draw the clock)


Draw the time shown on each clock


	<b>7:56</b>
---	-------------


	<b>12:27</b>
--	--------------


	<b>11:14</b>
--	--------------

	<b>3:03</b>
---	-------------


	<b>11:10</b>
---	--------------

	<b>9:09</b>
--	-------------

	<b>6:43</b>
---	-------------

	<b>12:17</b>
--	--------------


	<b>12:28</b>
---	--------------


	<b>7:55</b>
--	-------------


Grade 2 Time Worksheet


# Telling time - 1 minute intervals (draw the clock)


Draw the time shown on each clock


	<b>4:17</b>
---	-------------

	<b>4:16</b>
--	-------------


	<b>6:50</b>
--	-------------


	<b>2:51</b>
---	-------------


	<b>5:45</b>
---	-------------

	<b>5:04</b>
--	-------------

	<b>2:19</b>
---	-------------

	<b>1:07</b>
--	-------------


	<b>5:26</b>
---	-------------

	<b>12:10</b>
--	--------------


Grade 2 Time Worksheet


# Telling time - 1 minute intervals (draw the clock)


Draw the time shown on each clock


	5:32
---	------


	12:20
--	-------


	12:23
--	-------

	10:48
---	-------


	3:36
---	------

	6:27
--	------

	4:31
---	------

	4:31
--	------


	12:55
---	-------


	3:55
--	------


Grade 2 Time Worksheet


# Telling time - 1 minute intervals (draw the clock)

Draw the time shown on each clock


	8:33
---	------


	9:39
--	------


	3:21
--	------


	3:16
---	------


	12:20
---	-------

	6:16
--	------

	4:25
---	------

	10:29
--	-------


	2:33
---	------


	3:52
--	------

Grade 2 Time Worksheet


# Telling time - 1 minute intervals (draw the clock)


Draw the time shown on each clock


	4:26
---	------


	6:08
--	------


	1:49
--	------


	6:27
---	------

	8:30
---	------

	8:40
--	------

	4:53
---	------

	8:40
--	------

	7:42
---	------

	10:29
--	-------