

Grade 1 Addition Worksheet

---

## Subtract by drawing

Draw the number of objects shown. Cross out those being subtracted. How many are left?



$6 - 5 = \boxed{\phantom{00}}$



$5 - 5 = \boxed{\phantom{00}}$



$3 - 2 = \boxed{\phantom{00}}$



$2 - 0 = \boxed{\phantom{00}}$




$6 - 5 = \boxed{\phantom{00}}$

Grade 1 Addition Worksheet


---

## Subtract by drawing


Draw the number of objects shown. Cross out those being subtracted. How many are left?




$3 - 2 = \square$




$5 - 2 = \square$



$4 - 1 = \square$



$3 - 0 = \square$



$5 - 5 = \square$