


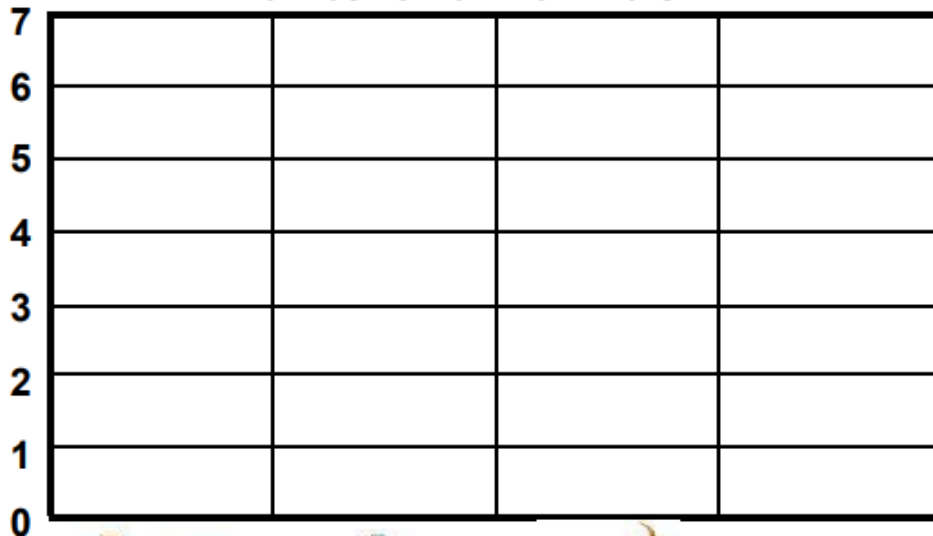
FARM ANIMALS BAR CHART

Count each farm animal.

Make a bar graph by coloring one box for each animal.



Number of farm animals



chicken



sheep



duck



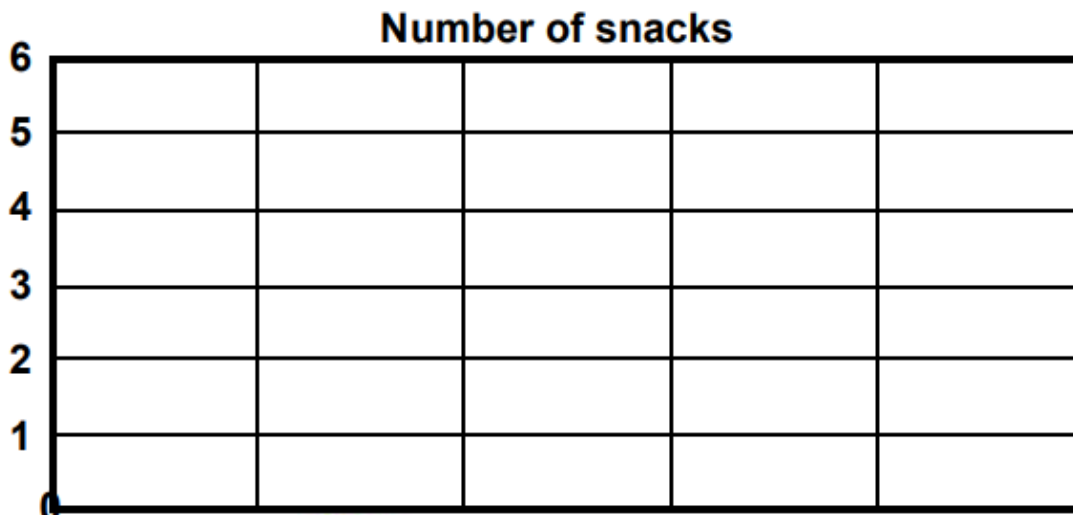
cow

1. How many ducks are there? _____
2. Which farm animal has the greatest in number? _____
3. Which farm animal has the least in number? _____

COUNTING SNACKS BAR CHART

Count each snack.

Make a bar graph by coloring one box for each snack.



cookies



muffin



bread



pretzel



pancake

1. How many pretzels are there? _____
2. How many bread loaves are there? _____
3. How many cookies are there? _____
4. Which snack has the least in number? _____
5. Which snack has the greatest in number? _____