

COUNTING OBJECTS (UP TO 20)

Count the objects and write the total.

1)  = _____

2)  = _____

3)  = _____

4)  = _____

5)  = _____

6)  = _____

7)  = _____

8)  = _____


9)  = _____

10)  = _____

11)  = _____


12)  = _____

13)  = _____


14)  = _____


COUNTING OBJECTS (UP TO 30)

Count the objects and write the total.


1)  = _____


2)  = _____


3)  = _____

4)  = _____


5)  = _____

6)  = _____


7)  = _____


8)  = _____

9)  = _____

10)  = _____

11)  = _____

12)  = _____

13)  = _____

14)  = _____