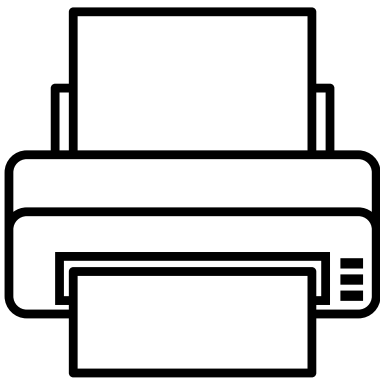


COMPARING LENGTHS USING CENTIMETERS

Measure the following objects and circle the shorter object.




Length: _____ centimeters



Length: _____ centimeters



Length: _____ centimeters




Length: _____ centimeters



Length: _____ centimeters

COMPARING LENGTHS USING CENTIMETERS

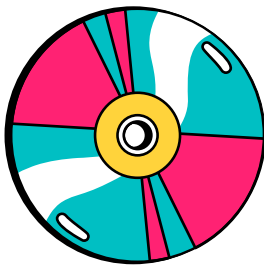
Measure the following objects and circle the shorter object.




Length: _____ centimeters




Length: _____ centimeters



Length: _____ centimeters



Length: _____ centimeters



Length: _____ centimeters