

Grade 2 Time Worksheet

Clock or calendar ?

Clock or calendar? Draw lines to the proper tools



Sleep for 8 hours





Valentine's
Day is in
February



Piano class
starts at 4pm



Lunch time at
12nn



Time to feed the cat



A bus arrives
every hour



Birthday party on
Sunday



Christmas in
December

Grade 2 Time Worksheet

Clock or calendar ?

Clock or calendar? Draw lines to the proper tools



Trip to Museum next week

School starts at 9



Christmas is in December




Watch TV for 30 minutes



Time for a baseball game



Concert next weekend



Library is closed every Sunday



Dinner will be ready by 6pm



The party was last weekend



Summer holidays will be in July



Let's get to bed at 8