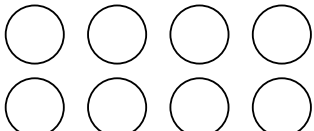
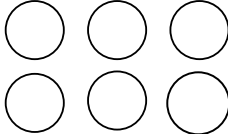



Grade 1 Addition Worksheet


Addition sentences

Find the missing number. Color in circles to help.

$$\boxed{4} + \boxed{} = \boxed{8}$$


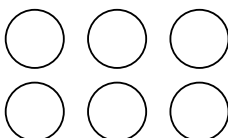
$$\boxed{1} + \boxed{} = \boxed{6}$$


$$\boxed{3} + \boxed{} = \boxed{5}$$


$$\boxed{2} + \boxed{5} = \boxed{7}$$


$$\boxed{5} + \boxed{} = \boxed{9}$$

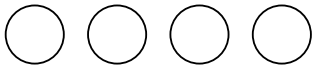

$$\boxed{4} + \boxed{} = \boxed{4}$$

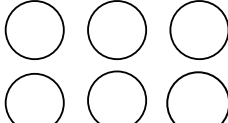

$$\boxed{6} + \boxed{} = \boxed{6}$$


Grade 1 Addition Worksheet

Addition sentences

Find the missing number. Color in circles to help.

$$\boxed{4} + \boxed{} = \boxed{4}$$


$$\boxed{4} + \boxed{} = \boxed{6}$$


$$\boxed{1} + \boxed{} = \boxed{3}$$


$$\boxed{2} + \boxed{6} = \boxed{8}$$


$$\boxed{4} + \boxed{} = \boxed{9}$$


$$\boxed{3} + \boxed{} = \boxed{4}$$


$$\boxed{5} + \boxed{} = \boxed{6}$$
