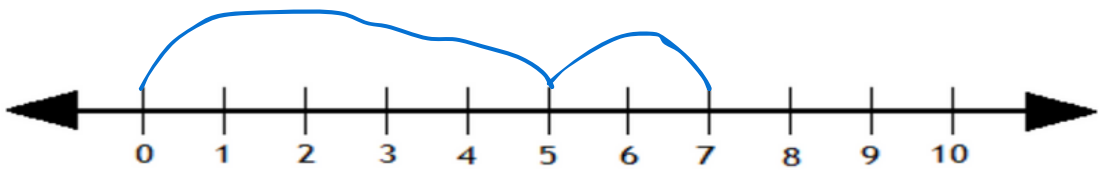


Adding with number lines

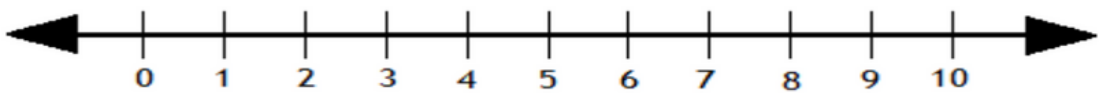
Solve the following by drawing hops on the number line.

1



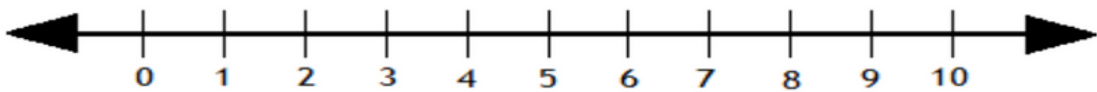
$$5 + 2 = \boxed{7}$$

2



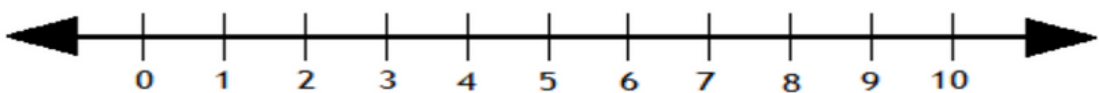
$$6 + 5 = \boxed{}$$

3



$$8 + 2 = \boxed{}$$

4

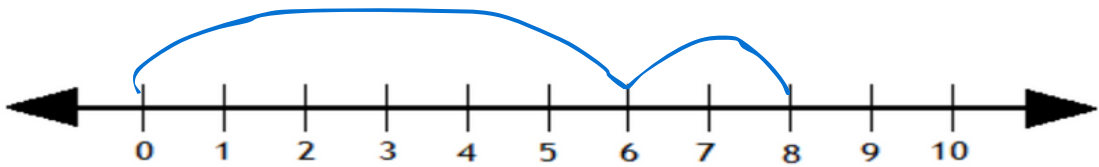


$$6 + 6 = \boxed{}$$

Adding with number lines

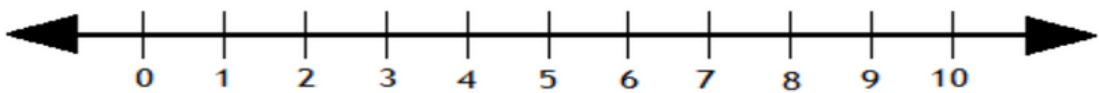
Solve the following by drawing hops on the number line.

1



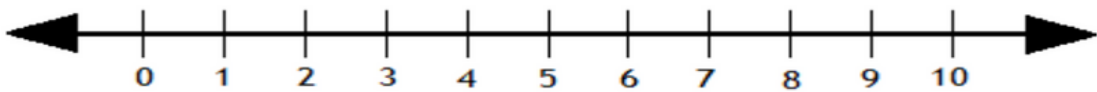
$$6 + 2 = \boxed{7}$$

2



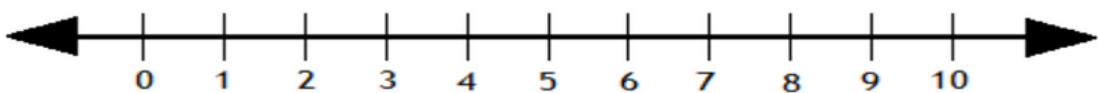
$$1 + 5 = \boxed{}$$

3



$$8 + 6 = \boxed{}$$

4



$$3 + 6 = \boxed{}$$